

# Geography

## Section II (continued)

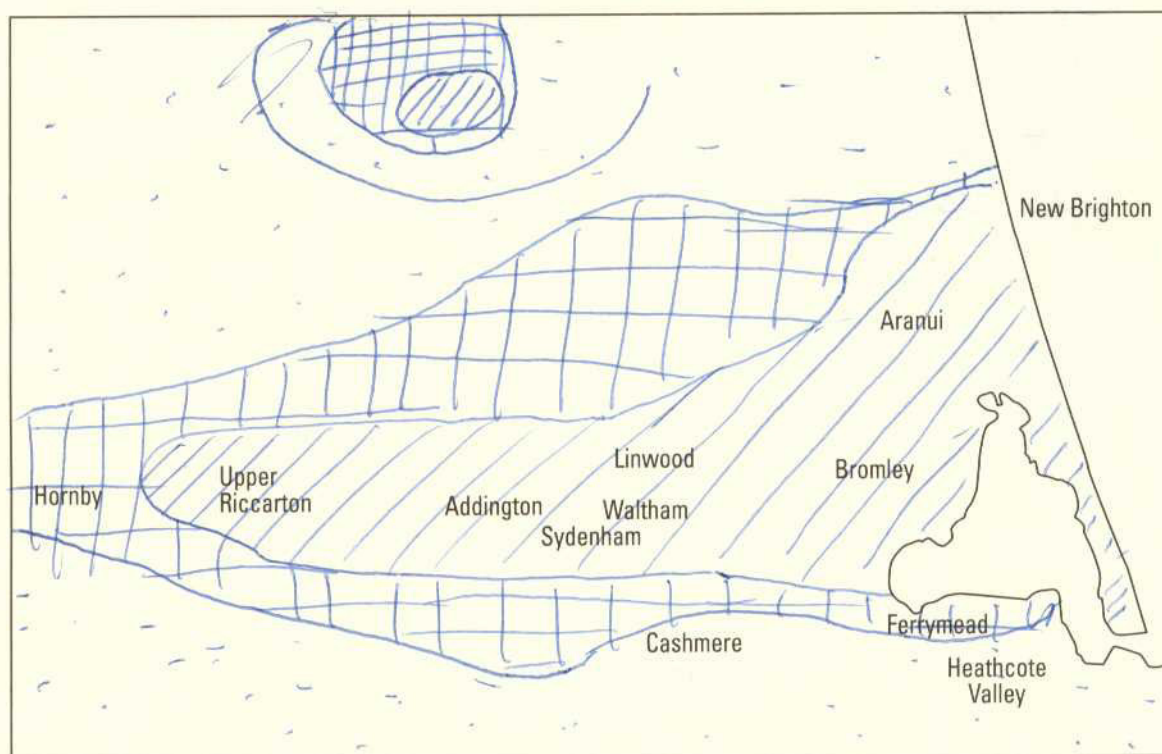
Marks

### Question 17 (9 marks)

(a) Refer to Source C.


Draw a simplified choropleth map to show the distribution of deprivation in Christchurch.


3



KEY

 Most deprived

 Mixed

 Least deprived

Question 17 continues on page 14

Question 17 (continued)

(b) Refer to Sources C, D, F, H and I.

From these sources, name TWO locations within Christchurch that demonstrate different urban dynamics, and account for these differences.

6

Exurbanisation - people are moving from ~~large~~ the city to ~~smaller~~, more rural areas, seen in Addington to Halswell.

~~Urban~~

Counterurbanisation - regional areas such as Hornby, Bromly up to Riverside

End of Question 17