

# Geography

## Section II (continued)

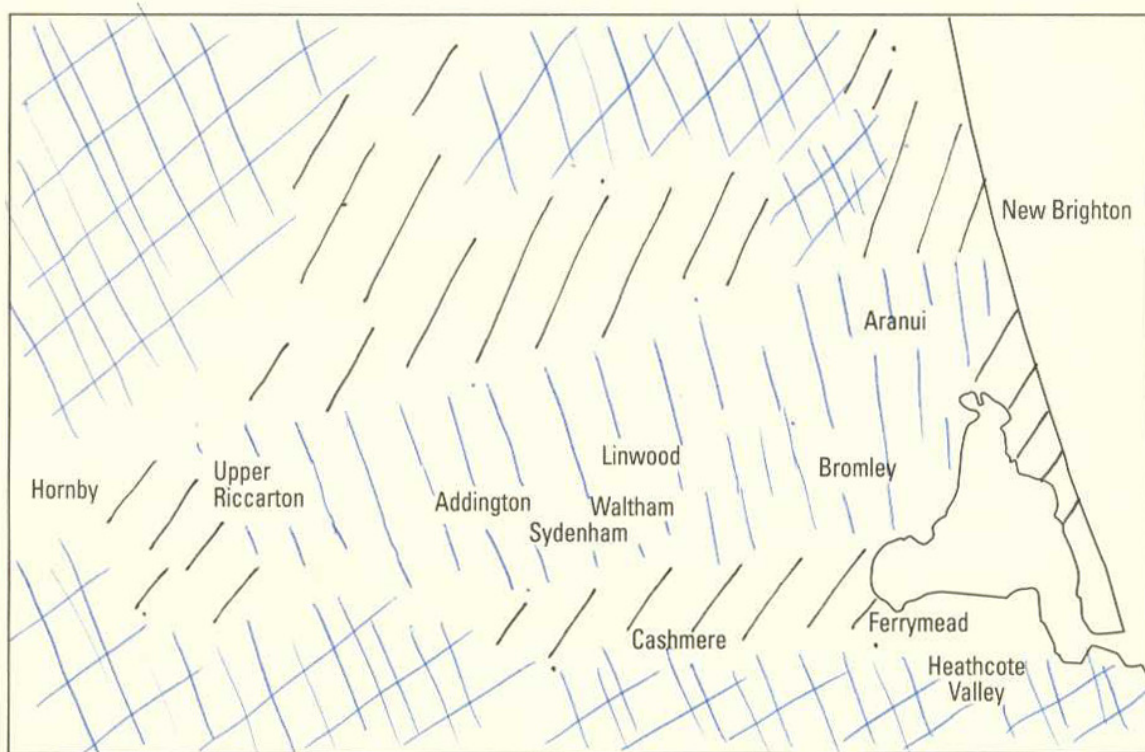
Marks

### Question 17 (9 marks)




(a) Refer to Source C.

Draw a simplified choropleth map to show the distribution of deprivation in Christchurch.

3



KEY

-  Most deprived
-  Mixed
-  Least deprived

Question 17 continues on page 14

## Question 17 (continued)

(b) Refer to Sources C, D, F, H and I.

From these sources, name TWO locations within Christchurch that demonstrate different urban dynamics, and account for these differences.

6

\* Linwood - according to the index of deprivation it classifies living space as a contributing factor hence Linwood must be undergoing a process of urban consolidation which involves increasing housing densities thereby limiting living space and lowering the cost of land.

\* Lyttelton Harbour - is undergoing a process of suburbanisation as it is appearing to become heavily populated as people seek work in the area.

## End of Question 17

consolidation  
 decay  
 renewal  
 decentralisation  
 ex-counter  
 urban village  
 suburbanisation  
 spatial exclusion