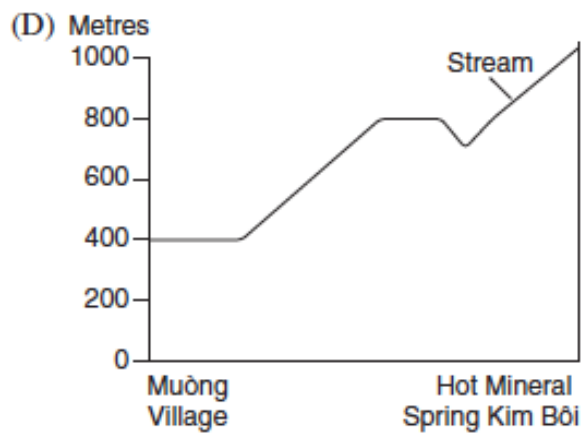
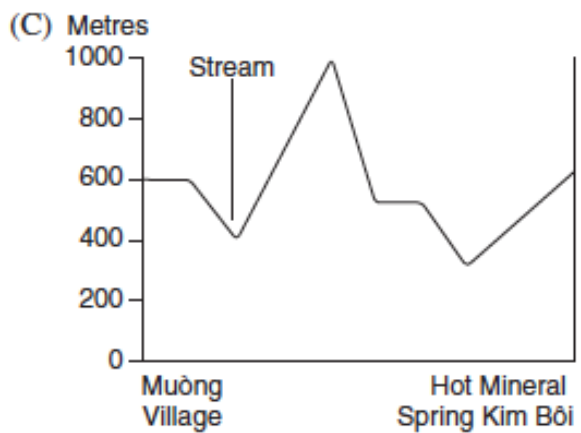
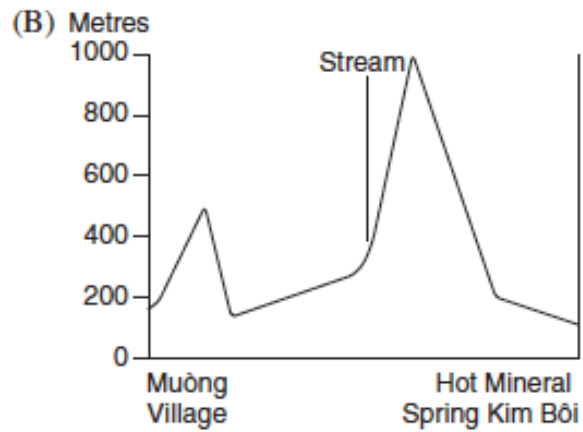
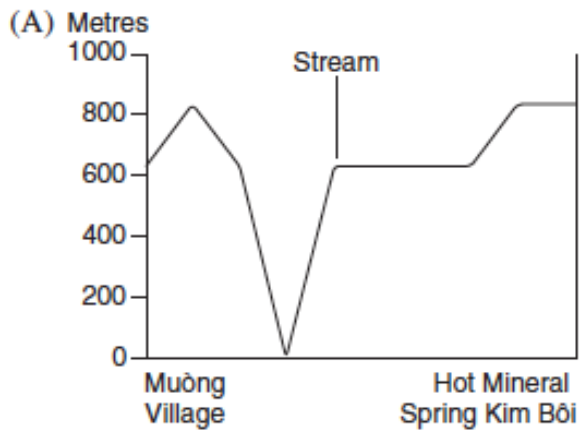


Question 15

Refer to Source B to answer Questions 13–15. (map awaiting copyright clearance)

Which of the following best represents a cross-section from the Muồng Village (B6) to the Hot Mineral Spring Kim Bôi (C6)?



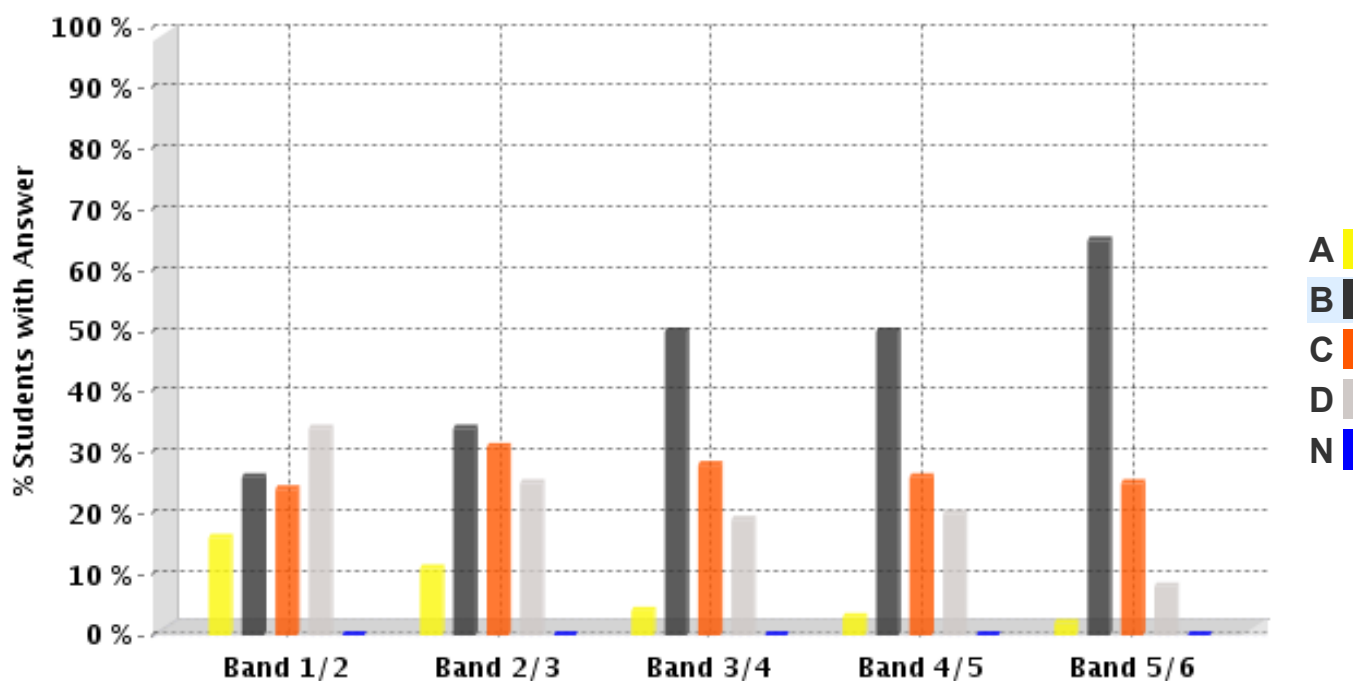
A ✗ A

B ✓ B

C ✗ C

D ✗ D

HSC Statistics on this Question:



	Band 1/2	Band 2/3	Band 3/4	Band 4/5	Band 5/6
A	16%	11%	4%	3%	2%
B	26%	34%	50%	50%	65%
C	24%	31%	28%	26%	25%
D	34%	25%	19%	20%	8%
N	0%	0%	0%	0%	0%

The table and graph show, for the groups of students whose marks in the examination corresponded to the borderline between two bands, what percentages of each group selected the responses A, B, C and D. N is used to identify: No valid response.