

--	--	--	--	--

Centre Number

Section II (continued)

--	--	--	--	--	--	--	--	--

Student Number

Question 19 (7 marks)

- (a) Why is it recommended that the earth lead be removed first and replaced last when disconnecting or connecting an automotive battery? **1**

.....

.....

.....

.....

- (b) What does CCA refer to in an automotive battery? **1**

.....

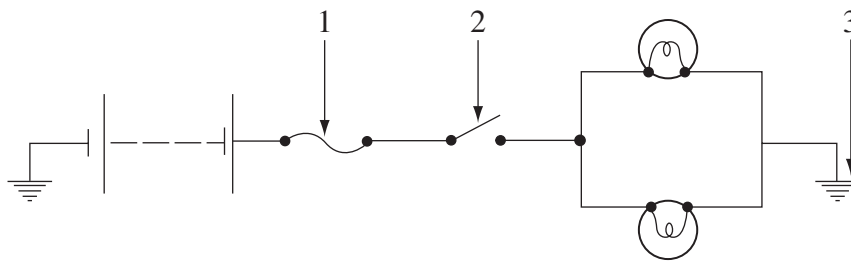
.....

Question 19 continues on page 14

Question 19 (continued)

(c) This diagram shows some components in an electrical circuit.

3

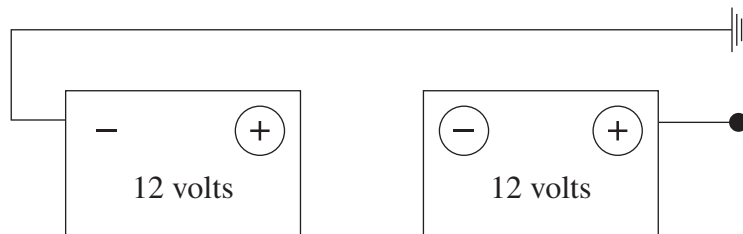


Complete the table naming and describing the function of each numbered component.

Component	Name	Function
1		
2		
3		

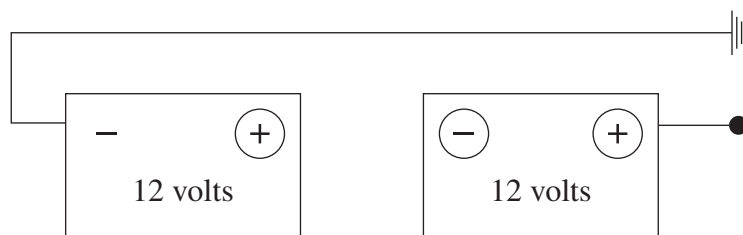
(d) In the diagram below, draw lines to show how to connect the terminals to increase battery output voltage to 24 volts.

1



(e) In the diagram below, draw lines to show how to connect the terminals to maintain battery output voltage at 12 volts.

1



End of Question 19